

IMO Class 01

Total Questions: 35

Time: 60 min

1. If Monday is the first day of the week, which day is the fifth day?

A) Wednesday B) Thursday

C) Friday D) Saturday

2. What comes next in the pattern: $\Delta, \circ, \square, \Delta, \circ, \square, \Delta, \circ, ___?$

A) Δ B) \circ C) \square D) \star

3. Find the missing number in the series: 2, 4, 6, $___$, 10.

A) 7 B) 8 C) 9 D) 12

4. If 5 children are standing in a line, and Rina is 2nd from the front, what is her position from the back?

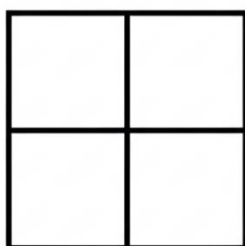
A) 2nd B) 3rd C) 4th D) 5th

5. Which is the odd one out?

A) Carrot B) Potato

C) Apple D) Onion

6. How many squares are there in this picture?



A) 4 B) 5 C) 8 D) 1

7. If 'Cat' is written as 3120, and 'Dog' is written as 4157, how would 'Ant' be written (using a similar pattern)?

A) 11420 B) 114

C) 1142 D) 1420

8. Which of these numbers is the smallest even number greater than 10?

A) 10 B) 11 C) 12 D) 14

9. How many tens are there in 56?

A) 5 B) 6 C) 50 D) 60

10. What is the sum of the largest 1-digit number and the smallest 2-digit number?

A) 19 B) 10 C) 18 D) 11

11. Which option shows the correct arrangement of numbers from smallest to largest?

A) 25, 18, 30, 42 B) 18, 25, 30, 42

C) 42, 30, 25, 18 D) 18, 30, 25, 42

12. If a clock shows 3 o'clock now, what time will it show after 2 hours?

A) 1 o'clock B) 4 o'clock

C) 5 o'clock D) 6 o'clock

13. A baker baked 2 dozen cookies. How many cookies did he bake in total? (1 dozen = 12)

A) 12 B) 14 C) 24 D) 20

14. How much money is shown here?



A) 25 Rupees B) 39 Rupees

C) 19 Rupees D) 28 Rupees

15. What is $7 + 7 - 5$?

A) 9 B) 10 C) 14 D) 12

IMO Class 01

Total Questions: 35

Time: 60 min

16. I am a number. If you add 8 to me, you get 15. What number am I?

- A) 6 B) 7 C) 8 D) 9

17. Which shape has 4 equal sides?

- A) Rectangle B) Triangle
C) Square D) Circle

18. There are 2 groups of 5 apples each. How many apples are there in total?

- A) 7 B) 5 C) 10 D) 12

19. Which container holds the most water?



- A) Container A B) Container B
C) Container C D) All are equal

20. What is the value of 3 tens + 4 ones?

- A) 34 B) 43 C) 7 D) 304

21. Renu has 17 beads. She needs 25 beads to make a necklace. How many more beads does she need?

- A) 7 B) 8 C) 9 D) 10

22. Which fruit is usually red and round?

- A) Banana B) Orange
C) Apple D) Grapes

23. If today is Tuesday, what day was it yesterday?

- A) Monday B) Wednesday

- C) Sunday D) Thursday

24. Which month comes after July?

- A) June B) August
C) September D) May

25. How many fingers do you have on both hands (excluding thumbs)?

- A) 8 B) 10 C) 4 D) 6

26. Which vehicle has 4 wheels?

- A) Bicycle B) Motorcycle
C) Car D) Scooter

27. Which shape has the most corners?



- A) Triangle B) Square
C) Circle D) Pentagon

28. What is the value of one dozen + one score? (1 score = 20)

- A) 22 B) 32 C) 42 D) 30

29. If you cut a square paper once, what is the maximum number of pieces you can get?

- A) 1 B) 2 C) 3 D) 4

30. Which number is exactly in the middle of 10 and 20?

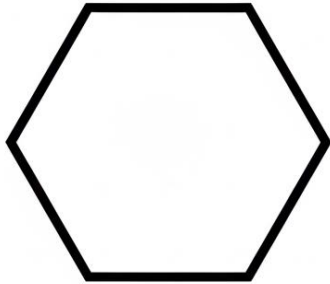
- A) 14 B) 15 C) 16 D) 12

31. How many sides does this shape have?

IMO Class 01

Total Questions: 35

Time: 60 min



A) 4 B) 6 C) 5 D) 7

32. A farmer has 10 cows and 5 goats. How many animals does he have in total?

A) 10 B) 5 C) 15 D) 20


33. If you count by 5s, what number comes after 35?

A) 36 B) 30 C) 40 D) 45

34. What is the value of $5 + 5 + 5 - 5$?

A) 5 B) 10 C) 15 D) 20

35. Which bag has the fewest balls?



A) Bag A B) Bag B
C) Bag C D) They are all equal