

IMO CLASS 1

Sample Paper

Total Questions: 35

Total Marks: 40

Time: 1 hr.

Section – 1 : Numerals, Number names, Number Sense (2 digit numbers), Addition, Subtraction, Lengths, Weights and Comparisons, Time, Money, Geometrical Shapes and Solids, Patterns

Section – 2 : Higher Order Thinking Questions - Syllabus as per Section – 1.


Section – 3 : Patterns, Odd One Out, Measuring Units, Geometrical Shapes, Spatial Understanding, Grouping, Analogy, Ranking Test, Problems based on Figures.

PATERN & MARKING SCHEME




| Section | Subjective (MCQ) | Hot's | Logical Reasoning |
|--------------------|------------------|-------|-------------------|
| Number of Question | 20 | 5 | 10 |
| Marks per Question | 1 | 2 | 1 |

MATHEMATICS

1. Whichh of the following has 6 objects?



2. Which of the following shows the least value?



4. What do you do at night?

- a) Sleep
- b) Play
- c) Go to school
- d) None of these

5. ₹10+₹10+₹10=_____.

- a) ₹35
- b) ₹30
- c) ₹40
- d) ₹20

6. Which of the following is correct sum?

- a) 3+4=9
- b) 5+5=10
- c) 2+6=9
- d) 1+5=8



GG RS LEARNING HUB PVT. LTD.

ANSWER KEY

- | | | | |
|-------|-------|-------|-------|
| 1. C | 2. D | 3. D | 4. A |
| 5. B | 6. B | 7. D | 8. A |
| 9. C | 10. C | 11. D | 12. D |
| 13. C | | | |

OLYMP QUIZ