

IMO CLASS 4

Sample Paper

Total Questions: 35

Total Marks: 40

Time: 1 hr.

Section – 1 : Numerals and Number Names, Number Sense (more than 4-digit numbers), Computation Operations, Fractions, Length, Weight, Capacity, Time, Money, Geometry, Perimeter of Various Shapes, Symmetry, Conversions, Data Handling

Section – 2 : Higher Order Thinking Questions - Syllabus as per Section – 1.

Section – 3 : Patterns, Alphabet Test, Coding-Decoding, Ranking Test, Mirror Images, Geometrical Shapes and Solids, Embedded Figures, Direction Sense Test, Days and Dates & Possible Combinations, Analogy and Classification.

PATERN & MARKING SCHEME

Section	Subjective (MCQ)	Hot's	Logical Reasoning
Number of Question	20	5	10
Marks per Question	1	2	1

MATHEMATICS

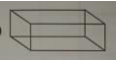

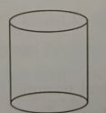
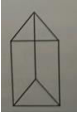
1. Naina, Shonam, Sohail and Tanu have a circular bangle of radius 2 cm, 3 cm, 5 cm, 1 cm, respectively. Who has largest bangle?

- a) Sohail
- b) Shonam
- c) Naina
- d) Tanu

2. _____ thousands = 80 hundred.

- a) 8
- b) 7
- c) 6
- d) 9

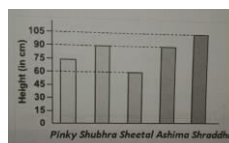
3. Which of the following figures has exactly 3 faces?

- a) 
- b) 
- c) 
- d) 

4. How would you write 251 as a Roman numeral?

- a) XCLI
- b) CXLI
- c) CCLI
- d) XXLI

5. The given bar graph shows the height of five children. What is the difference between the height of the tallest child and the shortest child?



- a) 45 cm
- b) 30 cm
- c) 60 cm
- d) 105 cm

6. What is the weight of marble P?



- a) 300 g
- b) 250 g
- c) 240 g
- d) 350 g



GG RS LEARNING HUB PVT. LTD.

ANSWER KEY

- | | | | |
|-------|-------|-------|-------|
| 1. A | 2. A | 3. B | 4. A |
| 5. A | 6. B | 7. C | 8. D |
| 9. A | 10. A | 11. C | 12. A |
| 13. A | | | |

OLYMP QUIZ